

AZAAN INTERNATIONAL SCHOOL

Grade - I

Activity Sheet- II

Subject-MATHS

Name: _____ Class: _____ Sec: _____

Chapter No: 2. ADDITION UP TO 20.

I. Fill in the blanks.

- a. 1 more than 35 is _____.
- b. 4 tens and 5 ones make _____.
- c. 10 more than 3 tens is _____.
- d. The number before 31 is _____.
- e. 10 less than 4 tens is _____.

II. Solve the following.

- 1. $10 + 2 =$ _____
- 2. $4 + 0 =$ _____
- 3. $1 + 5 =$ _____
- 4. $12 + 6 =$ _____
- 5. $0 + 9 =$ _____
- 6. $18 + 2 =$ _____

III. Solve by drawing shapes, slanting lines and dots.

- a. There are 8 big fishes and 5 small fishes in a pond. How many fishes are there altogether?



$$\square + \square = \square$$

- b. Ali has 6 red roses and 7 white roses. How many roses does he have in all?

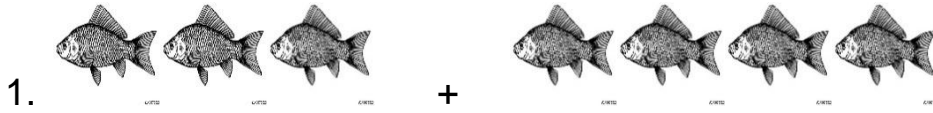


$$\square + \square = \square$$

c. There are 12 goats and 4 horses in a farm. How many animals are there in the farm altogether?

$$\square + \square = \square$$

IV. Circle the correct number equation that matches the picture.



- a. $2 + 4 = 6$ b. $3 + 4 = 7$ c. $4 + 4 = 8$



- a. $4 + 3 = 7$ b. $5 + 4 = 9$ c. $5 + 3 = 8$

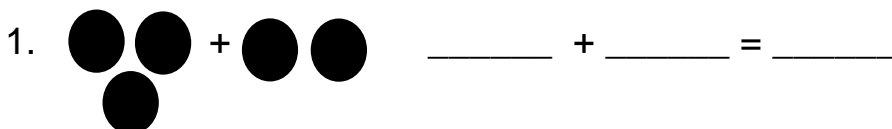




- a. $2 + 5 = 7$ b. $2 + 4 = 6$ c. $2 + 6 = 8$





- a. $4 + 5 = 9$ b. $4 + 3 = 7$ c. $5 + 5 = 10$

V. Count the shapes. Write the numbers and find the sum.




2.  +  _____ + _____ = _____

3.  +  _____ + _____ = _____

4.  +  _____ + _____ = _____

VI. Look at the pictures. Write addition story and solve the sum in two different ways.



ADDITION STORY: _____

a. Apples
+
Mangoes
Fruits =

b. Mangoes
+
Apples
Fruits =